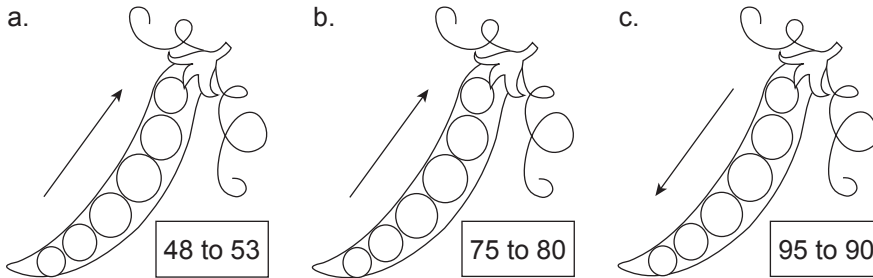


Worksheet 1

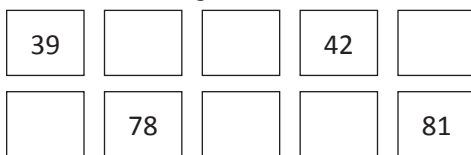
1. Fill in the numbers on the peas in ascending or descending order as given.



2. Fill in the blanks.

- a. $10 + 10 + 10 + 10 + 10 + 10 + 10 + 10 = \dots\dots\dots$
- b. $10 + 10 + 10 + 10 + 10 + 10 + 10 + 10 + 10 = \dots\dots\dots$
- c. $10 + 10 + 10 + 10 + 10 + 10 + 10 = \dots\dots\dots$

3. Fill in the missing numbers.



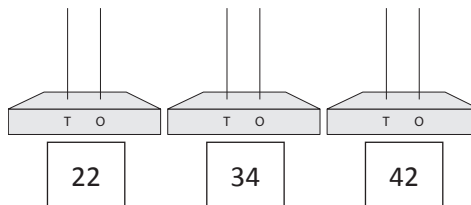
4. Count in 10s.



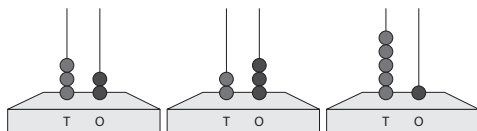
5. Complete the following statements.

- a. Five tens are **fifty** or **50**
- b. Eight tens are $\dots\dots\dots$ or $\dots\dots\dots$
- c. Three tens are $\dots\dots\dots$ or $\dots\dots\dots$
- d. Ten tens are $\dots\dots\dots$ or $\dots\dots\dots$
- e. Four tens are $\dots\dots\dots$ or $\dots\dots\dots$
- f. Two tens are $\dots\dots\dots$ or $\dots\dots\dots$
- g. Nine tens are $\dots\dots\dots$ or $\dots\dots\dots$
- h. Six tens are $\dots\dots\dots$ or $\dots\dots\dots$

6. Draw beads on the abacus to indicate the following numbers.



7. Count the beads and write the number.



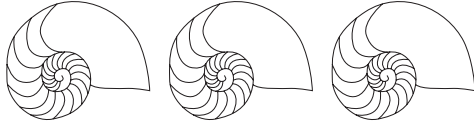
8. Write the number for:

- a. Forty- five $\dots\dots\dots$
- b. Sixty-three $\dots\dots\dots$
- c. Ninety-nine $\dots\dots\dots$
- d. Fifty-seven $\dots\dots\dots$
- e. Eighty-two $\dots\dots\dots$

Worksheet 2

1. Write the biggest number on the shell. 2. Write the smallest number on the penguin.

a. 45, 72, 59 b. 97, 89, 93 c. 56, 66, 68



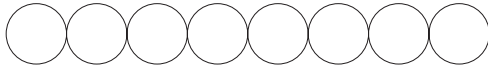
a. 48, 92, 39 b. 57, 59, 95 c. 66, 76, 26



3. Fill in the blanks with the symbol $<$, $>$ or $=$. 4. Write in words.
- a. 48 84 b. 26 25 a. 28 b. 66
- c. 72 27 d. 35 35 c. 52 d. 85
- e. 92 99 f. 86 64 e. 97 f. 39

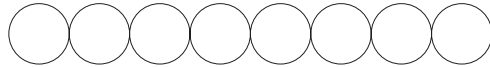
5. Arrange in ascending order.

45, 89, 72, 56, 34, 27, 68, 12



6. Arrange in descending order.

15, 79, 42, 58, 84, 29, 90, 62



7. Fill in the number before.

a. 40 b. 93
c. 75 d. 86
e. 19 f. 61

8. Fill in the number after.

a. 56 b. 98
c. 72 d. 39
e. 84 f. 67

9. Fill in the number between.

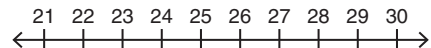
a. 39 41
b. 76 78
c. 24 26
d. 53 55
e. 19 21
f. 88 90

10. Write the numbers in sequence from.

35					
	42		44		
					52

11. Fill in the blanks using the number line.

- a. The number two places after 23 is
- b. The number six places before 29 is
- c. The number which $10 + 10 + 10$ is equal to
- d. The number between 26 and 28 is
- e. The number which is $10 + 10 + 5$ is equal to
- f. The biggest number on this number line is
- g. The smallest number on this number line is



Answers to Worksheet 1

1. a. 48, 49, 50, 51, 52, 53 b. 75, 76, 77, 78, 79, 80
c. 95, 94, 93, 92, 91, 90
2. a. 80 b. 90 c. 70
3. 39, 40, 41, 42, 43; 77, 78, 79, 80, 81
4. 10, 20, 30, 40, 50; 60, 70, 80, 90, 100
5. b. eighty, 80 c. thirty, 30 d. hundred, 100 e. forty, 40
f. twenty, 20 g. ninety, 90 h. sixty, 60
7. 32; 23; 51
8. a. 45 b. 63 c. 99 d. 57 e. 82

Answers to Worksheet 2

1. a. 72 b. 97 c. 68
2. a. 39 b. 57 c. 26
3. a. < b. > c. > d. = e. < f. >
4. a. Twenty-eight b. Sixty-six c. Fifty-two
d. Eighty-five e. Ninety-seven f. Thirty-nine
5. 12, 27 34, 45, 56, 68, 72, 89
6. 90, 84, 79, 62, 58, 42, 29, 15
7. a. 39 b. 92 c. 74 d. 85 e. 18 f. 60
8. a. 57 b. 99 c. 73 d. 40 e. 85 f. 68
9. a. 40 b. 77 c. 25 d. 54 e. 20 f. 89
10. 35, 36, 37, 38, 39, 40, 41, 42, 43, 44, 45, 46, 47, 48, 49, 50, 51, 52
11. a. 25 b. 23 c. 30 d. 27 e. 25 f. 30 g. 21